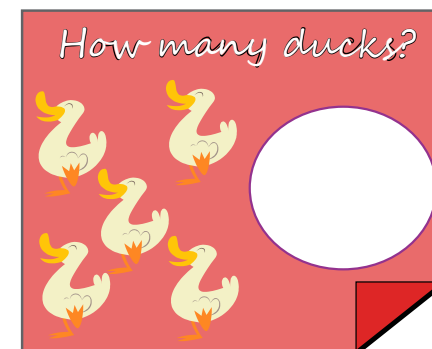


$$\begin{array}{c} \text{3 balls} \end{array} + \begin{array}{c} \text{4 balls} \end{array} = \bigcirc$$

Name: _____



BIG MATHS BEAT THAT!

Write these numbers in order

8	2	4
<input type="text"/>	<input type="text"/>	<input type="text"/>

One more than
3 is?


Double
4 is

$$6 + \square = 10$$

$$3 + 6 = \bigcirc$$


Half of 8 is... \bigcirc

5 take away
3 is... \bigcirc



$$\begin{array}{c} \text{candy cane} \\ \text{candy cane} \end{array} + \begin{array}{c} \text{candy cane} \\ \text{candy cane} \end{array} = \bigcirc$$

Name: _____



BIG MATHS BEAT THAT!

Write these numbers in order

5	2	3
<input type="text"/>	<input type="text"/>	<input type="text"/>

1 less than 5
is?



Double
2 is

$$3 + \square = 10$$

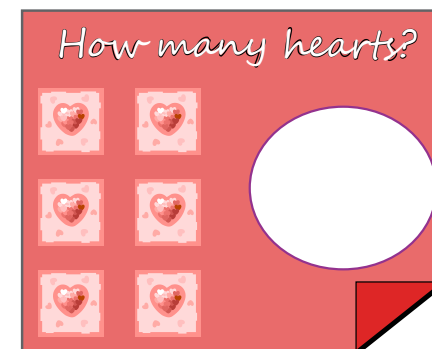
$$6 + 2 =$$

Half of 12 is...

4 take away
3 is...



Name: _____



BIG MATHS BEAT THAT!

Write these numbers in order

7	9	2
<input type="text"/>	<input type="text"/>	<input type="text"/>

1 more than 4
is?



Double
5 is

$$7 + \square = 10$$

$$7 + 2 =$$

Half of 14 is...

5 take away
1 is...



Name: _____



BIG MATHS BEAT THAT!

Write these numbers in order

6	4	8
<input type="text"/>	<input type="text"/>	<input type="text"/>

1 less than 7
is?

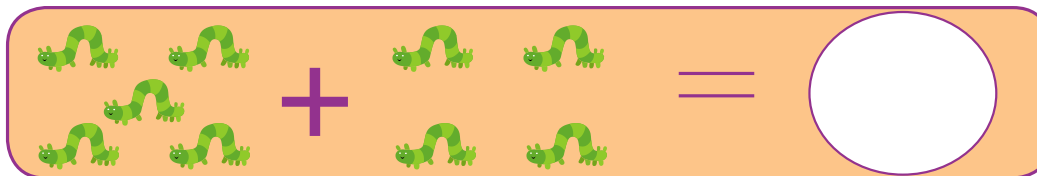

Double
5 is

$$2 + \square = 10$$


$$5 + 4 =$$

Half of 8 is...

9 take away
6 is...



Name: _____



BIG MATHS BEAT THAT!

Write these numbers in order

2	9	1
<input type="text"/>	<input type="text"/>	<input type="text"/>

1 more than 7
is?


Double
1 is

$$4 + \square = 10$$


$$6 + 3 =$$

Half of 14 is...

7 take away
4 is...



Name: _____



BIG MATHS BEAT THAT!

Write these numbers in order

8	5	7
<input type="text"/>	<input type="text"/>	<input type="text"/>

1 less than 8
is?


Double
4 is

$$1 + \square = 10$$


$$5 + 3 =$$

Half of 8 is...

9 take away
8 is...



Name: _____



BIG MATHS BEAT THAT!

Write these numbers in order

4	3	5
<input type="text"/>	<input type="text"/>	<input type="text"/>

1 more than 6
is?


Double
2 is

$$5 + \square = 10$$

$$2 + 5 =$$


Half of 12 is...

8 take away
3 is...



$$\begin{array}{cc} \text{mouse} & \text{mouse} \\ \text{mouse} & \text{mouse} \end{array} + \begin{array}{cc} \text{mouse} & \text{mouse} \\ \text{mouse} & \text{mouse} \end{array} = \bigcirc$$

Name: _____



BIG MATHS BEAT THAT!

Write these numbers in order

7	1	6
<input type="text"/>	<input type="text"/>	<input type="text"/>

1 less than 6
is?


Double
5 is




$$8 + \square = 10$$

$$4 + 5 =$$


Half of 8 is...

10 take away
3 is...



 +  = 

Name: _____



BIG MATHS BEAT THAT!

Write these numbers in order

6	4	5
<input type="text"/>	<input type="text"/>	<input type="text"/>

1 more than 5
is?


Double
3 is

6 + = 10


5 + 3 = 

Half of 6 is... 

8 take away
6 is... 



Name: _____



BIG MATHS BEAT THAT!

Write these numbers in order

7	9	2
<input type="text"/>	<input type="text"/>	<input type="text"/>

1 less than 9
is?

Double
1 is

$$9 + \square = 10$$

$$3 + 5 =$$

Half of 12 is...

8 take away
6 is...